



**INDIAN SCHOOL MUSCAT
MIDDLE SECTION**




SUBJECT: SCIENCE	REVISION WORKSHEET #13
TOPIC: REPRODUCTION IN PLANTS	CLASS: VII
RESOURCE PERSON: Ms. SOJITHA	DATE: /01/19

Name of the student _____ Sec _____ Roll no _____

Q.1. Write any two artificial methods of vegetative reproduction.

Q.2. Identify the type of asexual reproduction shown in the given figures



Q.3. Differentiate between sexual and asexual reproduction

Sl.no	Sexual reproduction	Asexual reproduction
1		
2		

Q.4. Write any two advantages of vegetative reproduction.

Q.5. How do spores survive for a long time in unfavorable conditions?

.....

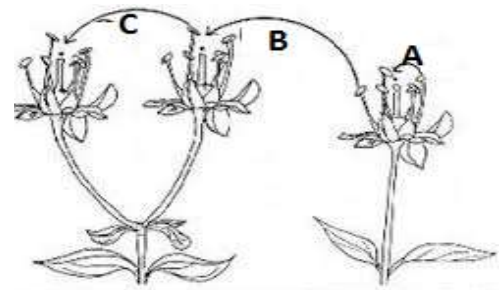
.....

Q.6. Draw and label male reproductive part in a flower.

Q.7. (a) Identify the process labelled A, B &C

(b) Define the process B

(c) Write any TWO differences between B &C



.....

.....

.....

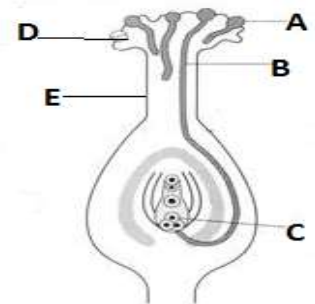
Q.8. Mention two characteristics of wind dispersed seeds.

.....

.....

Q.9. Name the process shown in the picture.

Label A, B, C, D&E in the diagram.



.....

.....

.....

Q.10. What are unisexual flowers? Give any two examples.

.....

.....

